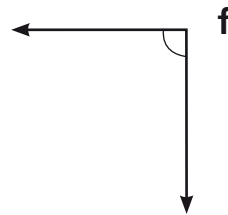
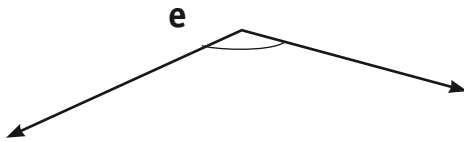
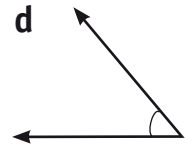
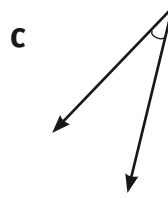
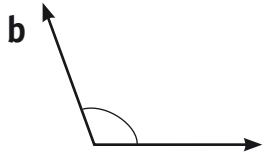
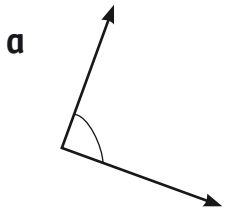


Angles

1 Colour the right angles blue, the acute angles green and the obtuse angles brown.



2 Draw:

a right angle.	an acute angle.	an obtuse angle.

3 a Name 2 places where we see right angles.

b Name 2 places where we see acute angles.



4 Explain how an angle is formed.

Self Assessment 😊😊😊

<p>ACMMG064 Geometric reasoning • Identify angles as measures of turn and compare angle sizes in everyday situations.</p>	Score	Basic	Sound	High
--	-------	-------	-------	------