




Chance

1






Starting at ● draw 5 different ways to pass the three blocks and get back to ●.
 Use a different colour for each path.
 Use an arrow to show the direction of your path.

eg \longrightarrow or \longleftarrow

2 Sam had these shorts and T-shirts.

Shorts	T-shirts
Blue	Red
Green	White
White	Black



List all the combinations Sam could wear.

Shorts	T-shirts

Shorts	T-shirts

3 Choose one term to describe each event.

- a You will see a rainbow today.
- b You will play with friends.
- c You will walk 100 km before dinner.
- d You will drink water today.

impossible, certain, likely, unlikely

Self Assessment 😊 😊 😊

ACMSP067 Chance • Conduct chance experiments, identify and describe possible outcomes and recognise variation in results.	Score	Basic	Sound	High