
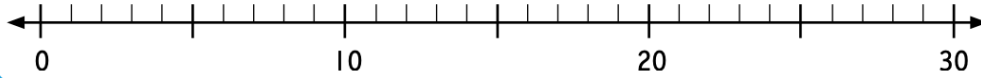


Subtraction on a number line



Subtract to 20



- is the take away sign. It means *take away, subtract, difference between, minus or less.*

1 Use the number line to find the difference.

a $17 - 9 =$ b $12 - 4 =$ c $10 - 3 =$ d $16 - 7 =$
e $15 - 8 =$ f $26 - 9 =$ g $18 - 12 =$ h $23 - 5 =$
i $19 - 7 =$ j $29 - 17 =$ k $15 - 9 =$ l $21 - 7 =$

2 a 15 pencils, 3 broke. How many not broken?

- =

b 29 jellybeans, 8 eaten. How many left?

- =

c 36 books, 5 torn. How many not torn?

- =

d 22 keys, 0 lost. How many keys?

- =

e 17 cakes, all eaten. How many left?

- =

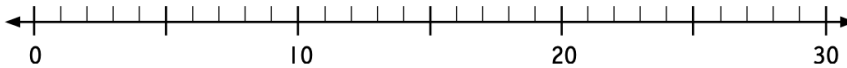
f \$48, \$12 spent. How much left?

- =

Subtraction on a number line



Subtract to 20



- is the take away sign. It means *take away, subtract, difference between, minus or less.*

1 Use the number line to find the difference.

a $17 - 9 =$ b $12 - 4 =$ c $10 - 3 =$ d $16 - 7 =$
e $15 - 8 =$ f $26 - 9 =$ g $18 - 12 =$ h $23 - 5 =$
i $19 - 7 =$ j $29 - 17 =$ k $15 - 9 =$ l $21 - 7 =$

2 a 15 pencils, 3 broke. How many not broken?

- =

b 29 jellybeans, 8 eaten. How many left?

- =

c 36 books, 5 torn. How many not torn?

- =

d 22 keys, 0 lost. How many keys?

- =

e 17 cakes, all eaten. How many left?

- =

f \$48, \$12 spent. How much left?

- =