

# Odd and Even Numbers Quiz

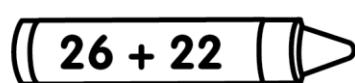
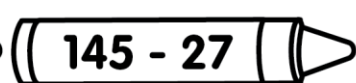
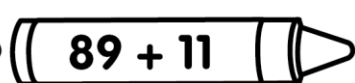
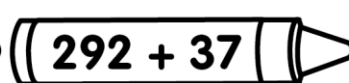
Name: \_\_\_\_\_

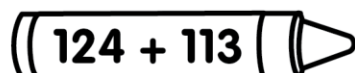
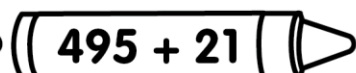
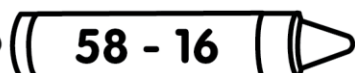
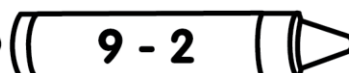
Total: / 27

1. Fill in the missing words to complete the properties of odd and even numbers. Then, write an example number sentence for each. (16 marks)

Addition	Example
Odd + odd = _____	
Even + even = _____	
Odd + _____ = even	
Even + odd = _____	
Subtraction	Example
_____ - odd = even	
Even - _____ = even	
Odd - even = _____	
Even - odd = _____	

2. Colour the answers that are odd numbers, green. Colour the answers that are even numbers, orange. (8 marks)

  $26 + 22$    $145 - 27$    $89 + 11$    $292 + 37$

  $124 + 113$    $495 + 21$    $58 - 16$    $9 - 2$

3. Anna multiplies two numbers and her answer is an even product.

What could be true about the two numbers she multiplied?

Two answers are correct. Show your working out. (3 marks)

- One number is even and one number is odd.
- Both numbers are even.
- Both numbers are odd.

Working Out Space: