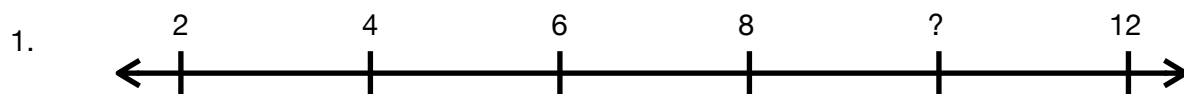
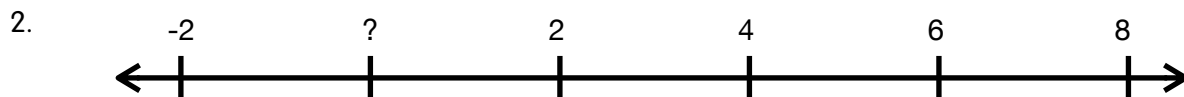


# Pattern Practice

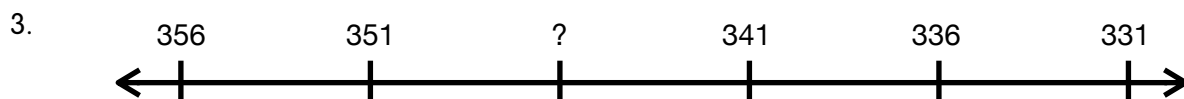
Number lines can be very helpful for figuring out number patterns. Use the number lines below to figure out the pattern's rule, and the missing numbers (?) in the pattern.



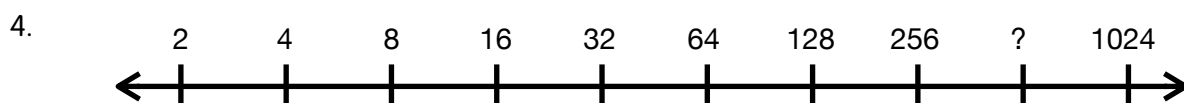
Rule: \_\_\_\_\_ Missing Number (?) \_\_\_\_\_



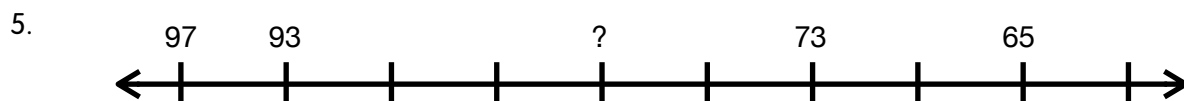
Rule: \_\_\_\_\_ Missing Number (?) \_\_\_\_\_



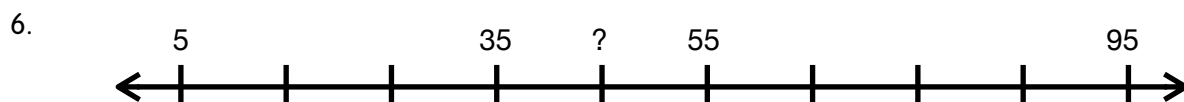
Rule: \_\_\_\_\_ Missing Number (?) \_\_\_\_\_



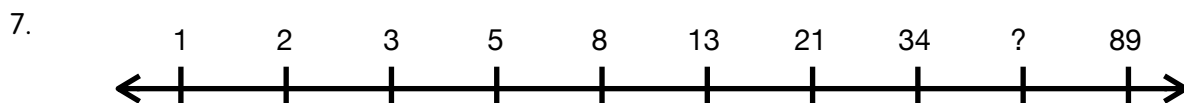
Rule: \_\_\_\_\_ Missing Number (?) \_\_\_\_\_



Rule: \_\_\_\_\_ Missing Number (?) \_\_\_\_\_



Rule: \_\_\_\_\_ Missing Number (?) \_\_\_\_\_



Rule: \_\_\_\_\_ Missing Number (?) \_\_\_\_\_